


Maths

Telling the time

Time recommended: 30 minutes

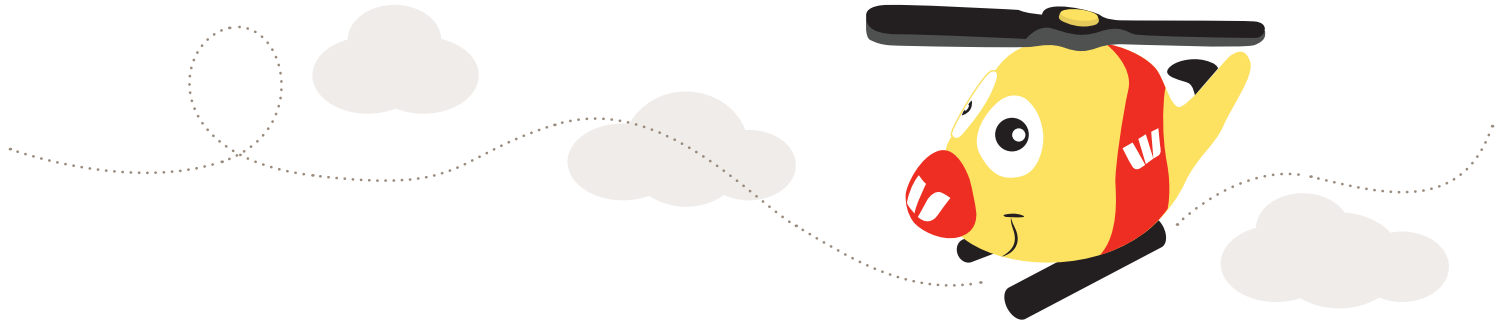
Year 1 and 2



Strand:	Measurement and Geometry
Descriptor:	Using units of measurement
	<ul style="list-style-type: none">• Tell time to the half-hour (ACMMG020)• Tell time to the quarter-hour, using the language of 'past' and 'to' (ACMMG039)• Describe duration using months, weeks, days and hours (ACMMG021)• Name and order months and seasons (ACMMG040)
Strand:	Number and Algebra
Descriptor:	Number and place value
Solve simple addition and subtraction problems using a range of efficient mental and written strategies (ACMNA030)	



Name: _____




Telling the time

Learning how to tell the time is an important skill for everyone to gain. Complete the following tasks to practise telling the time.


TASK ONE:

It takes Todd, the Rescue Crew Officer 30 minutes (half an hour) to conduct the morning brief with operational staff. If he starts at 8:30am, at what time will he complete the task?


Circle the correct answer below.



10.30am



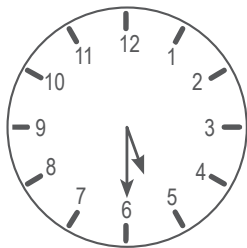
9.00am





9.30am

TASK TWO:

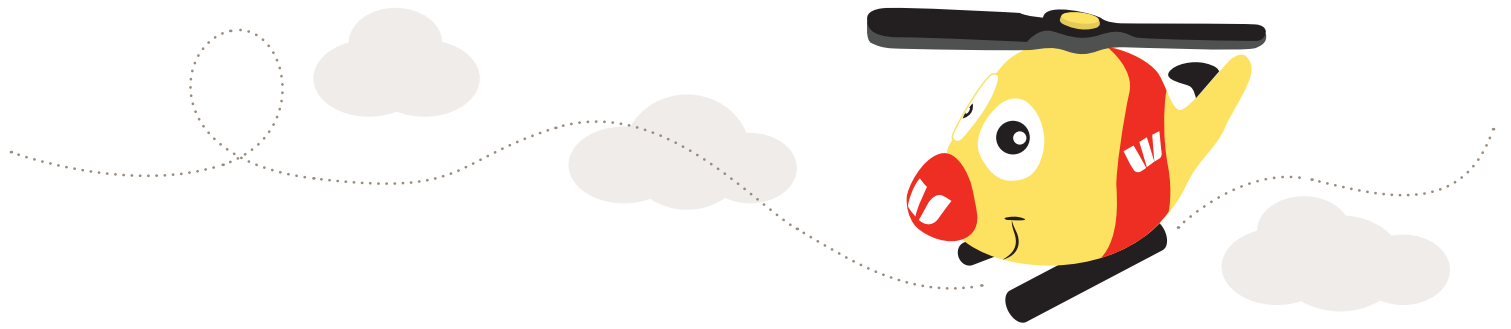
Looking at the clock diagrams below, write down the time that is shown using numbers.













TASK THREE:

It takes the Rescue Crew 15 minutes (quarter of an hour) to fly from the Base to a rescue location. If they leave base at 2.45pm, at what time will they arrive?


Circle the correct answer below.



4.00pm




3.30pm





3.00pm

TASK FOUR:

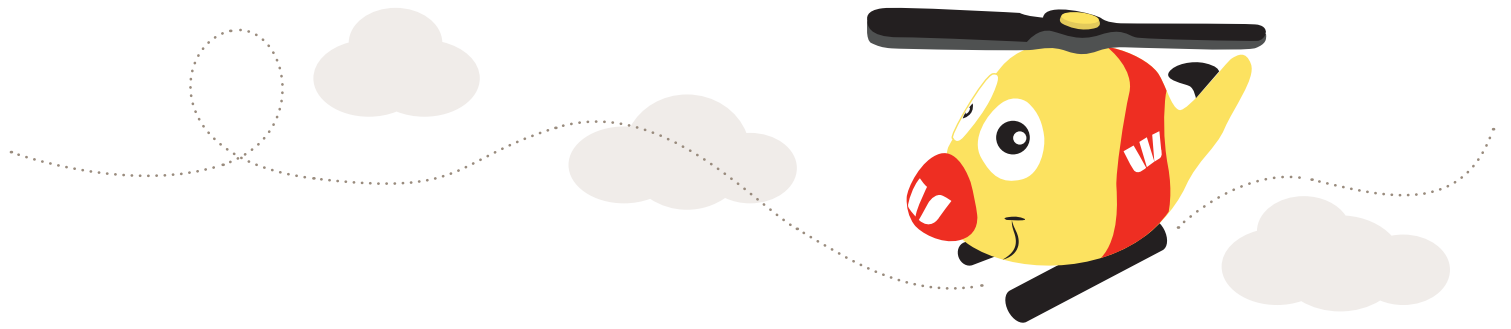
Looking at the clock diagrams below, write down the time that is shown using the words 'quarter past' and 'quarter to'.











TASK FIVE:

Draw a line between the following tasks and how often the Crew carries them out.

OPTIONS:

- Helicopter Wash Day
- Safety and Security Equipment Checks
- Training

FREQUENCY:

- Weekly
- Monthly
- Daily

TASK SIX:

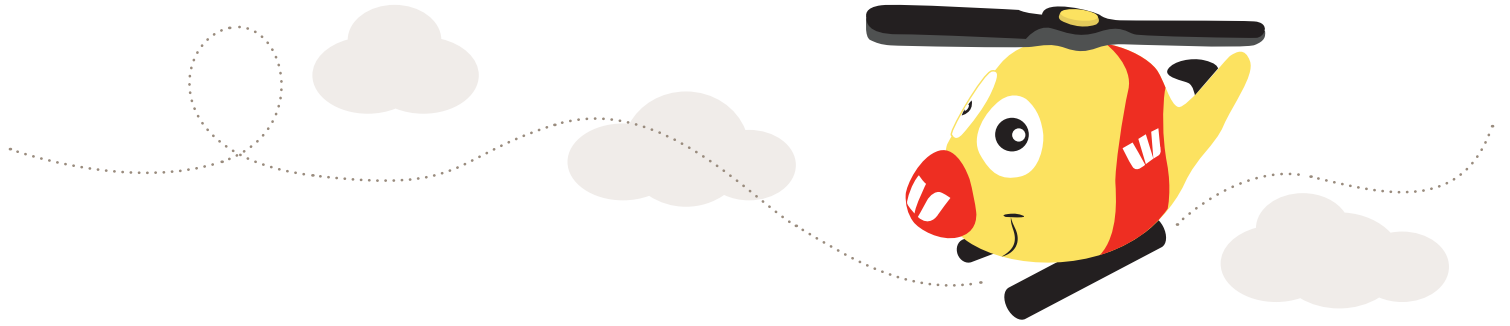
The Rescue Bases across Australia have different operation hours. All of them are available to help you over the summer season.

In the four boxes below, name the seasons (starting with summer) and draw a picture in each box depicting the weather.

Season 1: Summer

Season 2: _____





TASK SIX CONTINUED:

Season 3: _____

Season 4: _____

